

1. Work out $9.4 + 6.14$
(1 mark)2. Work out $11.3 - 7.84$
(1 mark)3. Work out 0.4×53
(2 marks)4. Work out $\pounds 15.36 \div 3$
(2 marks)

5. Round 9.521 to the nearest integer

.....
(1 mark)6. Work out $6 - (-15)$
(1 mark)7. What is $\frac{4}{5}$ of 35.....
(1 mark)

8. Find 15% of 50

.....
(1 mark)9. Convert $\frac{3}{5}$ to a decimal.....
(1 mark)10. Calculate $8^2 - \sqrt{1}$
(2 marks)

11. Write down the nth term

5, 10, 15, 20, 25

.....
(1 mark)

12. Simplify

 $\frac{4}{20}$
(1 mark)

Name : Class..... Score.....

13. Simplify $2x + 3x^2 + 5x - x^2$

.....
(2 marks)

14. Simplify $3y \times 6y$

.....
(1 mark)

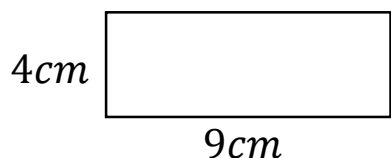
15. Expand $4(6a - 3)$

.....
(2 marks)

16. Write down all the factors of 30

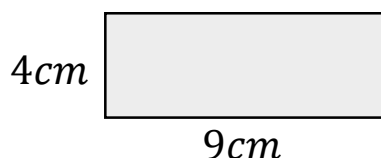
.....
(1 mark)

17. Calculate the perimeter




.....
(1 mark)

18. Calculate the area



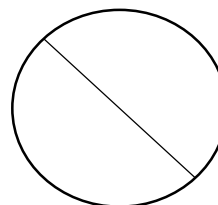
.....
(1 mark)

19. Name this shape



.....
(1 mark)

20. Name this part of a circle



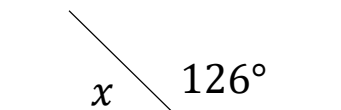
.....
(1 mark)

21. Draw all the lines of symmetry



(1 mark)

22. Calculate x



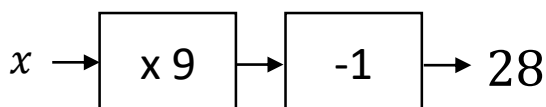
$x = \dots\dots\dots$
(1 mark)

23. Workout

$$\sqrt{25} + 5 \times 2^2$$

.....
(2 marks)

24. Solve



$x = \dots\dots\dots$
(1 mark)